

# MA 16100

## Study Guide - Exam # 3

### 1 Related Rates Word Problems Method:

- 1 Read problem carefully several times to understand what is asked.
- 2 Draw a picture (if possible) and label.
- 3 Write down the given rate; write down the desired rate.
- 4 Find an equation relating the variables.
- 5 Use Chain Rule to differentiate equation w.r.t to time and solve for desired rate.

2 The *Linear Approximation* (or tangent line approximation) to a function  $f(x)$  at  $x = a$  is the function  $L(x) = f(a) + f'(a)(x - a)$ ; Approximation formula  $f(x) \approx f(a) + f'(a)(x - a)$  for  $x$  near  $a$ ; if  $y = f(x)$ , the differential of  $y$  is  $dy = f'(x)dx$ .

3 Definitions of absolute maximum, absolute minimum, local/relative maximum, and local/relative minimum;  $c$  is a *critical number* of  $f$  if  $c$  is in the domain of  $f$  and either  $f'(c) = 0$  or  $f'(c)$  DNE.

4 **Extreme Value Theorem:** If  $f(x)$  is continuous on a closed interval  $[a, b]$ , then  $f$  always has an absolute maximum value and an absolute minimum value on  $[a, b]$ .

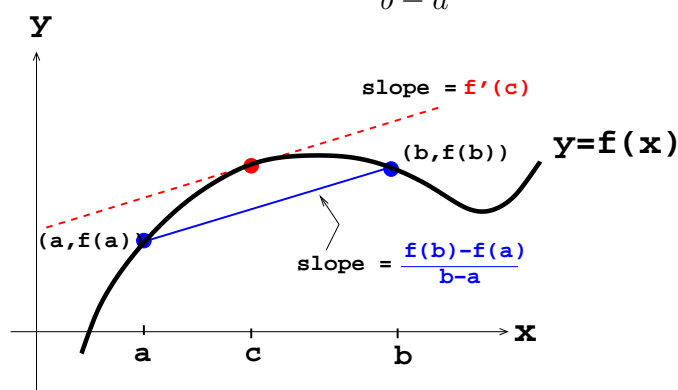
### 5 Method to Find Absolute Max/Min of $f(x)$ over Closed Interval $[a, b]$ :

- (i) Find all admissible critical numbers in  $(a, b)$ ;
- (ii) Find endpoints of interval;
- (iii) Make table of values of  $f(x)$  at the points found in (i) and (ii).

The largest value = abs max value of  $f$  and the smallest value = abs min value of  $f$ .

6 **Rolle's Theorem:** If  $f(x)$  is continuous on  $[a, b]$  and differentiable on  $(a, b)$ , and  $f(a) = f(b)$ , then  $f'(c) = 0$  for some  $c \in (a, b)$ .

7 **Mean Value Theorem:** If  $f(x)$  is continuous on  $[a, b]$  and differentiable on  $(a, b)$ , then there is a number  $c$ , where  $a < c < b$ , such that  $\frac{f(b) - f(a)}{b - a} = f'(c)$  :



i.e.,  $f(b) - f(a) = f'(c)(b - a)$

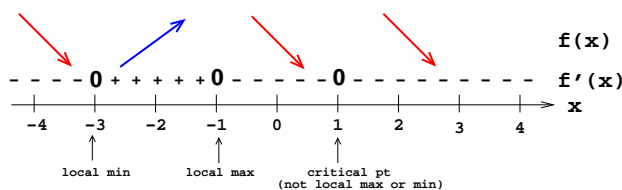
If something about  $f'$  is known, then something about the sizes of  $f(a)$  and  $f(b)$  can be found.

### 8 Fact: (Useful for integration theory later)

- (a) If  $f'(x) = 0$  for all  $x \in I$ , then  $f(x) = C$  for all  $x \in I$ .
- (b) If  $f'(x) = g'(x)$  for all  $x \in I$ , then  $f(x) = g(x) + C$  for all  $x \in I$ .

**9** Increasing functions:  $f'(x) > 0 \implies f \nearrow$ ; decreasing functions:  $f'(x) < 0 \implies f \searrow$ .

**Increasing/Decreasing**



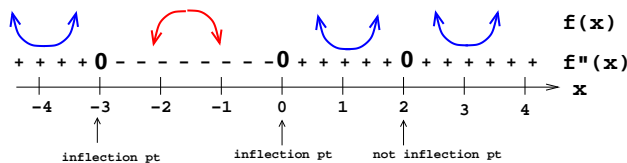
**10** **First Derivative Test:** Suppose  $c$  is a critical number of a continuous function  $f$ .

- (a) If  $f'$  changes from  $+$  to  $-$  at  $c \implies f$  has local max at  $c$
- (b) If  $f'$  changes from  $-$  to  $+$  at  $c \implies f$  has local min at  $c$
- (c) If  $f'$  does not change sign at  $c \implies f$  has neither local max nor local min at  $c$

(Displaying this information on a number line is much more efficient, see above figure.)

**11**  $f$  concave up:  $f''(x) > 0 \implies f \cup$ ; and  $f$  concave down:  $f''(x) < 0 \implies f \cap$ ; inflection point (i.e. point where concavity changes).

**Concave Up/Down**



(Displaying this information on a number line is much more efficient, see above figure.)

**12** **Second Derivative Test:** Suppose  $f''$  is continuous near critical number  $c$  and  $f'(c) = 0$ .

- (a) If  $f''(c) > 0 \implies f$  has a local min at  $c$ .
- (b) If  $f''(c) < 0 \implies f$  has a local max at  $c$ .

**Note:** If  $f''(c) = 0$ , then 2<sup>nd</sup> Derivative Test cannot be used, so then use 1<sup>st</sup> Derivative Test.

**13** **INDETERMINATE FORMS:**

(a) **Indeterminate Form (Types):**  $\frac{0}{0}$ ,  $\frac{\infty}{\infty}$ ,  $0 \cdot \infty$ ,  $\infty - \infty$ ,  $0^0$ ,  $\infty^0$ ,  $1^\infty$

(b) **L'Hopital's Rule:** Let  $f$  and  $g$  be differentiable and  $g'(x) \neq 0$  on an open interval  $I$  containing  $a$  (except possibly at  $a$ ). If  $\lim_{x \rightarrow a} f(x) = 0$  and if  $\lim_{x \rightarrow a} g(x) = 0$  [Type  $\frac{0}{0}$ ]; or if  $\lim_{x \rightarrow a} f(x) = \infty$  (or  $-\infty$ ) and if  $\lim_{x \rightarrow a} g(x) = \infty$  (or  $-\infty$ ) [Type  $\frac{\infty}{\infty}$ ], then

$$\lim_{x \rightarrow a} \frac{f(x)}{g(x)} = \lim_{x \rightarrow a} \frac{f'(x)}{g'(x)},$$

provided the limit on the right side exists or is infinite.

Use algebra to convert the different Indeterminate Forms in (a) into expressions where the above formula can be used.

**Important Remark:** L'Hopital's Rule is also valid for one-sided limits,  $x \rightarrow a^-$ ,  $x \rightarrow a^+$ , and also for limits when  $x \rightarrow \infty$  or  $x \rightarrow -\infty$ .

## 14 Curve Sketching Guidelines:

- (a) Domain of  $f$
- (b) Intercepts (if any)
- (c) Symmetry:
  - $f(-x) = f(x)$  for *even* function;
  - $f(-x) = -f(x)$  for *odd* function;
  - $f(x + p) = f(x)$  for *periodic* function
- (d) Asymptotes:
  - $x = a$  is a *Vertical Asymptote*: if either  $\lim_{x \rightarrow a^-} f(x)$  or  $\lim_{x \rightarrow a^+} f(x)$  is infinite
  - $y = L$  is a *Horizontal Asymptote*: if either  $\lim_{x \rightarrow \infty} f(x) = L$  or  $\lim_{x \rightarrow -\infty} f(x) = L$ .
- (e) Intervals: where  $f$  is increasing  $\nearrow$  and decreasing  $\searrow$ ; local max and local min
- (f) Intervals: where  $f$  is concave up  $\cup$  and concave down  $\cap$ ; inflection points

## 15 Optimization (Max/Min) Word Problems Method:

- 1 Read problem carefully several times.
- 2 Draw a picture (if possible) and label it.
- 3 Introduce notation for the quantity, say  $Q$ , to be extremized as a function of one or more variables.
- 4 Use information given in problem to express  $Q$  as a function of only one variable, say  $x$ . Write the domain of  $Q$ .
- 5 Use Max/Min methods to determine the absolute maximum value of  $Q$  or the absolute minimum of  $Q$ , whichever was asked for in problem.