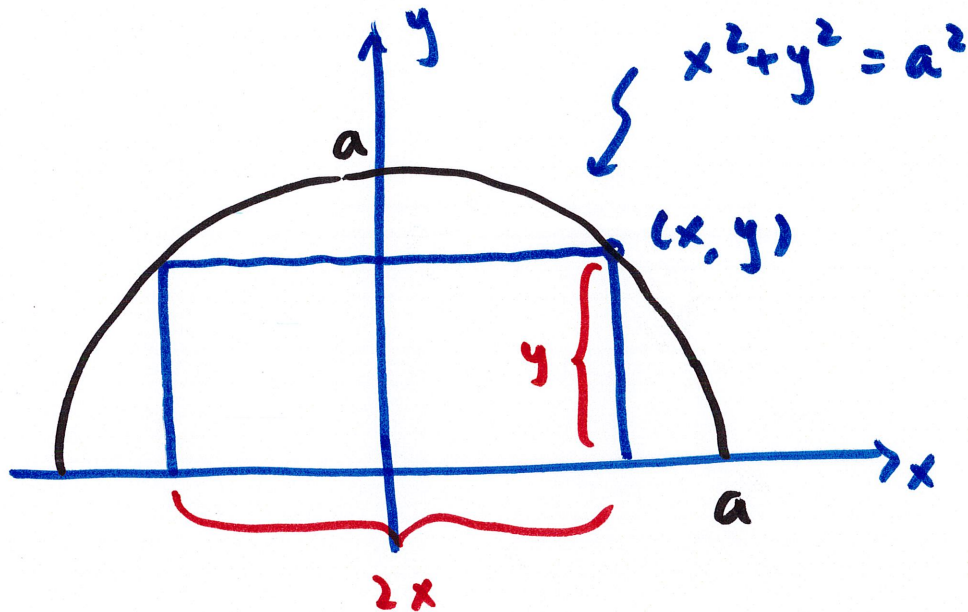
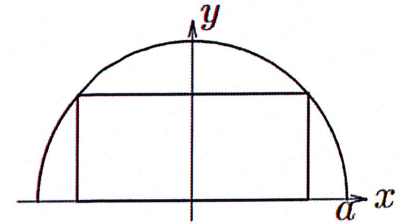


A rectangle is inscribed in the upper half of the circle $x^2 + y^2 = a^2$ as shown at right. Calculate the area of the largest such rectangle. A. $\frac{a^2}{2}$ B. $3a\sqrt{2}$ C. $2a^2$ D. $4a^2$ **E. a^2** .



height : y

length : $2x$

area: $A = 2xy$

need to eliminate one variable

circle eq: $x^2 + y^2 = a^2$

$$y^2 = a^2 - x^2$$

$$y = \sqrt{a^2 - x^2} = (a^2 - x^2)^{1/2}$$

area: $A(x) = 2x(a^2 - x^2)^{1/2}$

$$0 \leq x \leq a$$

find critical numbers, then compare $A(x)$ at critical numbers and at end points

$$A'(x) = (2x) \left(\frac{1}{2}\right) (a^2 - x^2)^{-1/2} (-2x) + (a^2 - x^2)^{1/2} (2)$$

Chain Rule

$$= (-2x^2) (a^2 - x^2)^{-1/2} + 2(a^2 - x^2)^{1/2}$$

$$= \frac{-2x^2}{(a^2 - x^2)^{1/2}} + 2(a^2 - x^2)^{1/2}$$

$$A' = 0 \rightarrow \frac{-2x^2}{(a^2 - x^2)^{1/2}} + 2(a^2 - x^2)^{1/2} = 0$$

$$2(a^2 - x^2)^{1/2} = \frac{2x^2}{(a^2 - x^2)^{1/2}}$$

$$a^2 - x^2 = x^2$$

$$2x^2 = a^2$$

$$x^2 = \frac{1}{2}a^2$$

$$x = \frac{1}{\sqrt{2}}a$$

$$, -\frac{1}{\sqrt{2}}a$$

not inside
interval of x
 $0 \leq x \leq a$

$$A(x) = 2x (a^2 - x^2)^{1/2}$$

$$A(0) = 0$$

$$A\left(\frac{1}{\sqrt{2}}a\right) = \frac{2}{\sqrt{2}}a (a^2 - \frac{1}{2}a^2)^{1/2} = \sqrt{2}a \left(\frac{1}{2}a^2\right)^{1/2} = \sqrt{2}a \cdot \frac{1}{\sqrt{2}}a = a^2$$

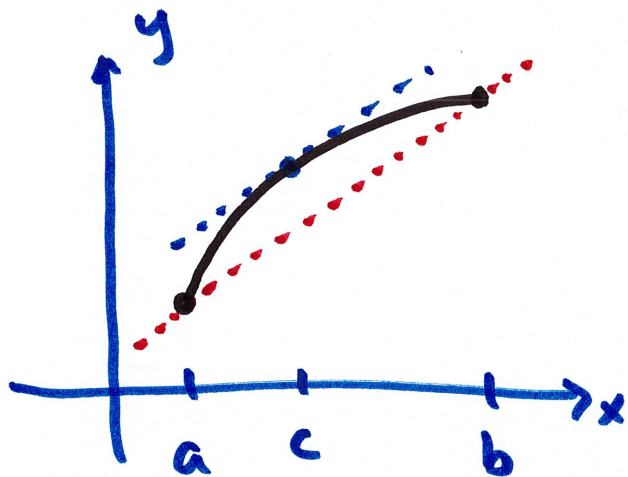
$$A(a) = 0$$

Given that $f(x)$ is differentiable for all x , $f(2) = 4$, and $f(7) = 10$, then the Mean Value Theorem states that there is a number c such that

A. $2 < c < 7$ and $f'(c) = \frac{6}{5}$
 B. $2 < c < 7$ and $f'(c) = \frac{5}{6}$
 C. $4 < c < 10$ and $f'(c) = \frac{6}{5}$
 D. $2 < c < 7$ and $f'(c) = 0$
 E. $4 < c < 10$ and $f'(c) = 0$.

Mean Value Theorem :

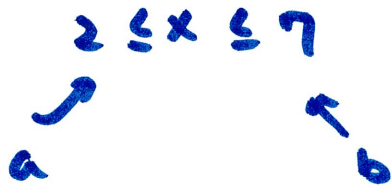
- $f(x)$ continuous on $[a, b]$
- $f(x)$ differentiable on (a, b)
- then there is a "c" s.t., $a \leq c \leq b$
- such that $f'(c) = \frac{f(b) - f(a)}{b - a}$



somewhere between a and b
 there is at least one place c
 where the tangent line slope =
 secant line slope through endpoints

know: $f(2) = 4$

$$f(7) = 10$$

$$2 \leq x \leq 7$$


The diagram shows the inequality $2 \leq x \leq 7$ with two arrows pointing downwards from the numbers 2 and 7. The arrow from 2 points to the letter 'a', and the arrow from 7 points to the letter 'b'.

somewhere between $x=2$ and $x=7$ there is a place

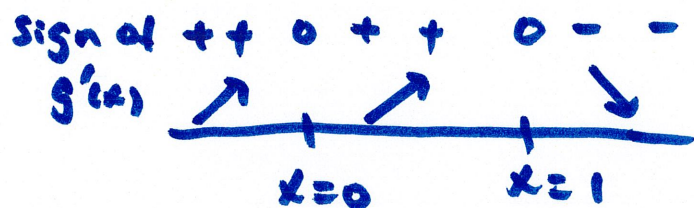
where $f' = \frac{f(7) - f(2)}{7 - 2} = \frac{10 - 4}{7 - 2} = \frac{6}{5}$

Which of the following is/are true about the function $g(x) = 4x^3 - 3x^4$? (1) g is decreasing for $x > 1$.
 (2) g has a relative extreme value at $(0, 0)$. (3) the graph of g is concave up for all $x < 0$.
 A. (1), (2) and (3) B. only (2) C. only (1) D. (1) and (2) E. (1) and (3).

$$g(x) = 4x^3 - 3x^4$$

$$g'(x) = 12x^2 - 12x^3 = 0$$

$$12x^2(1-x) = 0 \rightarrow x=0, x=1$$




inc: $(-\infty, 0), (0, 1)$

dec: $(1, \infty) \rightarrow$ statement (1) is correct

(2) is FALSE because for an extreme value to exist at $x=0$ there has to be a sign change in g' across $x=0$

$$g''(x) = 24x - 36x^2 = 0$$

$$12x(2-3x) = 0 \rightarrow x=0, x=2/3$$



(3) is TRUE FALSE

$$\lim_{x \rightarrow 0} \frac{2x - \sin^{-1} x}{2x + \tan^{-1} x} = \quad \text{A. } 1/2 \quad \text{B. } 2 \quad \text{C. } 1/3 \quad \text{D. } 1 \quad \text{E. } 0.$$

$$\lim_{x \rightarrow 0} \frac{2x - \sin^{-1} x}{2x + \tan^{-1} x} \xrightarrow{x=0} \frac{0}{0}$$

L'Hospital's Rule can be used
(the other form is $\frac{\infty}{\infty}$)

L'Hospital's Rule: $\lim_{x \rightarrow a} \frac{f(x)}{g(x)} = \lim_{x \rightarrow a} \frac{f'(x)}{g'(x)}$ if limit $\rightarrow \frac{0}{0}$ or $\frac{\infty}{\infty}$

$$\stackrel{L}{=} \lim_{x \rightarrow 0} \frac{2 - \frac{1}{\sqrt{1-x^2}}}{2 + \frac{1}{1+x^2}} \xrightarrow{x=0} \frac{2-1}{2+1} = \frac{1}{3}$$

Do NOT use

L'Hospital's Rule
if not $\frac{0}{0}$ or $\frac{\infty}{\infty}$

Find $\frac{d}{dx} \int_1^{2x} \sqrt{t^2 + 1} dt$ at $x = \sqrt{2}$. **A** 6 B. 3 C. $\sqrt{2}$ D. $\sqrt{4x^2 + 1}$ E. $\frac{1}{2\sqrt{3}}$.



deriv. of an integral \rightarrow Fundamental Theorem of Calculus (part 1)

$$\text{FTC 1: } \frac{d}{dx} \int_a^x f(t) dt = f(x)$$

here, the upper limit is not just x so we need to use

Chain Rule

$$\text{let } u = 2x$$

$$\text{then } \frac{d}{dx} \int_1^{2x} \sqrt{t^2 + 1} dt = \frac{d}{dx} \underbrace{\int_1^u \sqrt{t^2 + 1} dt}_{y(u)}$$

$$\text{Chain Rule: } \frac{dy}{dx} = \frac{dy}{du} \frac{du}{dx}$$

$$= \underbrace{\left(\frac{d}{du} \int_1^u \sqrt{t^2 + 1} dt \right)}_{\text{FTC 1}} \left(\frac{d}{dx} 2x \right)$$

FTC 1

$$= (\sqrt{u^2+1}) (2) \quad u = 2x$$

$$= 2 \sqrt{(2x)^2+1} = 2 \sqrt{4x^2+1}$$

at $x = \sqrt{2}$ we get $2 \sqrt{4(\sqrt{2})^2+1} = 6$

$$\int_3^4 x\sqrt{25-x^2} dx = \quad \text{A. } 0 \quad \text{B. } -37 \quad \text{C. } \frac{37}{3} \quad \text{D. } -\frac{74}{3} \quad \text{E. } \frac{7}{12}$$

$$\int_3^4 x\sqrt{25-x^2} dx \quad \text{need to use a substitution}$$

$$= \int_3^4 \boxed{x} \boxed{(25-x^2)^{1/2}} dx$$

compare x and $25-x^2$

deriv. of $25-x^2$ is $-2x$ which is a constant multiple

of x , so we let $\boxed{u = 25-x^2}$

$$\frac{du}{dx} = -2x$$

$$\boxed{du = -2x dx}$$

now we adjust the integration limits

old upper limit: $x=4 \rightarrow u=25-x^2=25-16=9$

old lower limit: $x=3 \rightarrow u=25-x^2=25-9=16$

$$\int_{(3)}^{(4)} (25-x^2)^{1/2} (x) dx$$

$u^{1/2}$ $-\frac{1}{2} du$

$du = -2x dx$
so $x dx = -\frac{1}{2} du$

Red annotations: $(4) \rightarrow 9$ and $(3) \leftarrow 16$

$$= \int_{16}^9 -\frac{1}{2} u^{1/2} du = -\frac{1}{2} \int_{16}^9 u^{1/2} du = -\frac{1}{2} \left(\frac{u^{3/2}}{3/2} \right) \Big|_{16}^9$$

DO NOT go back to x

$$= -\frac{1}{2} \left(\frac{2}{3} u^{3/2} \right) \Big|_{16}^9 = -\frac{1}{2} \left(\frac{2}{3} \cdot 9^{3/2} \right) - -\frac{1}{2} \left(\frac{2}{3} \cdot 16^{3/2} \right)$$

$$= -\frac{1}{2} \left(\frac{2}{3} \cdot 27 \right) + \frac{1}{2} \left(\frac{2}{3} \cdot \frac{64}{8} \right)$$

$$= -\frac{1}{3} \cdot 27 + \frac{1}{3} \cdot \frac{64}{8} = \cancel{-9} + \cancel{18} = 9 = -9 + \frac{64}{3} = \frac{37}{3}$$

Suppose that the mass of a radioactive substance decays from 18 gms to 2 gms in 2 days. How long will it take for 12 gms of this substance to decay to 4 gms? A. $\frac{\ln 3}{\ln 2}$ days (B) 1 day C. $\frac{\ln 2}{\ln 3}$ days D. 2 days E. $(\ln 3)^2$ days

Exponential growth/decay: $y(t) = y_0 e^{kt}$

$y_0 = 18$ t : time in days

$$y(2) = 2$$

now find k

$$y(t) = 18 e^{kt}$$

$$y(2) = 18 e^{k \cdot 2} = 2 \rightarrow e^{2k} = \frac{1}{9} \rightarrow \ln e^{2k} = \ln \frac{1}{9}$$

$$2k = \ln \frac{1}{9} \rightarrow \frac{1}{2} \ln \frac{1}{9} = k$$

$$12 \rightarrow 4 \quad y_0 = 12, \quad y(t) = 4$$

$$y(t) = y_0 e^{kt}$$

$$4 = 12 e^{\left(\frac{1}{2} \ln \frac{1}{9}\right) t}$$

$$\frac{1}{3} = e^{\ln\left(\frac{1}{9}\right)^{\frac{1}{2}} t}$$

~~$$e^{\frac{1}{2} t}$$~~

~~$$\frac{1}{3} = \left(\frac{1}{9}\right)^{\frac{1}{2} t}$$~~

$$\ln \frac{1}{3} = \ln e^{\ln\left(\frac{1}{9}\right)^{\frac{1}{2}} t}$$

$$= \ln\left(\frac{1}{9}\right)^{\frac{1}{2} t}$$

$$\ln\left(\frac{1}{3}\right) = \ln\left(\frac{1}{9}\right)^{\frac{1}{2} t}$$

$$\text{so } t = 1$$