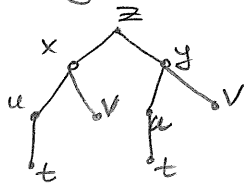


* Last time

- Partial derivatives
- Clairaut's Theorem: $f_{xy} = f_{yx}$ (given both are continuous)
- Chain Rule: always start by drawing the corresponding dependence,

e.g. if



$$\Rightarrow \frac{\partial z}{\partial t} = \frac{\partial z}{\partial x} \cdot \frac{\partial x}{\partial t} + \frac{\partial z}{\partial y} \cdot \frac{\partial y}{\partial t}$$

- Implicit differentiation: given $F(x,y)=0$, find $\frac{\partial y}{\partial x}$ or $\frac{\partial x}{\partial y}$.
 here x-independent variable $y=y(x)$ - function in x
 here y-independent variable $x=x(y)$ - function in y

$$0 = \frac{\partial}{\partial x} F(x, y=y(x)) = F_x \cdot \frac{\partial x}{\partial x} + F_y \cdot \frac{\partial y}{\partial x}$$

$$\Rightarrow \frac{\partial y}{\partial x} = -\frac{F_x}{F_y}$$

$$0 = \frac{\partial}{\partial y} F(x=x(y), y) = F_x \cdot \frac{\partial x}{\partial y} + F_y \cdot \frac{\partial y}{\partial y}$$

$$\Rightarrow \frac{\partial x}{\partial y} = -\frac{F_y}{F_x}$$

* Let us now see how implicit differentiation works for $F(x,y,z)=0$.
Note: We think of two variables as independent, while the third depends on those two

E.g. to find $\frac{\partial z}{\partial x}, \frac{\partial z}{\partial y}$ we think of x,y-independent and $z=z(x,y)$

$$0 = \frac{\partial}{\partial x} F(x,y,z=z(x,y)) = F_x \cdot \frac{\partial x}{\partial x} + F_y \cdot \frac{\partial y}{\partial x} + F_z \cdot \frac{\partial z}{\partial x} \Rightarrow \frac{\partial z}{\partial x} = -\frac{F_x}{F_z}$$

$$0 = \frac{\partial}{\partial y} F(x,y,z=z(x,y)) = F_x \cdot \frac{\partial x}{\partial y} + F_y \cdot \frac{\partial y}{\partial y} + F_z \cdot \frac{\partial z}{\partial y} \Rightarrow \frac{\partial z}{\partial y} = -\frac{F_y}{F_z}$$

Ex1: Find $\frac{\partial z}{\partial x}, \frac{\partial z}{\partial y}$ given $x^3 + y + z^4 = 2 - 3\cos(2x)e^{3y}z$

➤ Rewrite this equality as $F(x,y,z)=0$ with $F(x,y,z) = x^3 + y + z^4 - 2 + 3\cos(2x)e^{3y}z$

Applying the above formulas, get:

$$\frac{\partial z}{\partial x} = -\frac{3x^2 - 6\sin(2x)e^{3y}z}{4z^3 + 3\cos(2x)e^{3y}}$$

$$\frac{\partial z}{\partial y} = -\frac{1 + 9\cos(2x)e^{3y}z}{4z^3 + 3\cos(2x)e^{3y}}$$

LECTURE #7

* Directional derivatives

Recall: $f_x(x_0, y_0)$ - rate of change of f as we move in x -direction
 $f_y(x_0, y_0)$ - " " " " in y -direction

Question: Given a direction vector \vec{v} compute rate of change of f along \vec{v} .

! First: The directional derivative depends only on the direction of \vec{v} and not its magnitude. From now on, we will treat the case of unit vectors $\vec{u} = \vec{v} = \frac{\vec{v}}{\|\vec{v}\|}$.

Def: The directional derivative of $f(x, y)$ in the direction of a unit vector $\vec{u} = \langle a, b \rangle$ at the point $P(x_0, y_0)$ is

$$D_{\vec{u}} f(x_0, y_0) = \lim_{t \rightarrow 0} \frac{f(x_0 + ta, y_0 + tb) - f(x_0, y_0)}{t}$$

Applying chain rule to $z = f(x, y)$, $x = x(t) = x_0 + at$, $y = y(t) = y_0 + bt$, get:

$$D_{\vec{u}} f(x_0, y_0) = f_x(x_0, y_0) \cdot a + f_y(x_0, y_0) \cdot b$$

← that is how we will compute it in practice

Note: $D_x f = f_x$, $D_y f = f_y$, thus directional derivative generalizes 1st partials.

Rank: Intuitively, we can think as follows. Given a unit vector $\vec{u} = \langle a, b \rangle$, moving by $\langle at, bt \rangle$ from the point (x_0, y_0) is the same as moving by at along x -axis and then by b.t along y -axis, hence, the rate of change is exactly $a \cdot f_x + b \cdot f_y$.

Ex2: Find the directional derivative of $f(x, y) = e^x \sin y$ at the point $P(0, \pi/2)$ in the direction indicated by the angle $\theta = \pi/4$.

To apply our formula, first find unit vector \vec{u} specified by the given angle:
 $\vec{u} = \langle \cos \theta, \sin \theta \rangle = \langle 1/\sqrt{2}, 1/\sqrt{2} \rangle$

$\left. \begin{aligned} \partial_x f(x, y) &= e^x \sin y \Rightarrow \partial_x f(0, \pi/2) = 1 \\ \partial_y f(x, y) &= e^x \cos y \Rightarrow \partial_y f(0, \pi/2) = 0 \end{aligned} \right\} \Rightarrow D_{\vec{u}} f(0, \pi/2) = 1 \cdot \frac{1}{\sqrt{2}} + 0 \cdot \frac{1}{\sqrt{2}} = \frac{1}{\sqrt{2}}$

LECTURE #7

* Gradient Vector

Def: If $f = f(x, y)$, then the gradient of f is the vector function

$$\nabla f(x_0, y_0) = \langle f_x(x_0, y_0), f_y(x_0, y_0) \rangle$$

If $f = f(x, y, z)$, then the gradient of f is the vector function

$$\nabla f(x_0, y_0, z_0) = \langle f_x(x_0, y_0, z_0), f_y(x_0, y_0, z_0), f_z(x_0, y_0, z_0) \rangle$$

Key Fact: If \vec{u} is a unit vector then dot-product

$$D_{\vec{u}} f(x_0, y_0) = \nabla f(x_0, y_0) \cdot \vec{u}$$

Ex 3: (a) Find the gradient of $f(x, y) = x^2/y^3$

(b) Find the rate of change of f at $P(3, 1)$ in the direction $\vec{v} = \langle 3, -4 \rangle$


$$(a) \nabla f = \left\langle \frac{2x}{y^3}, -\frac{3x^2}{y^4} \right\rangle$$

$$(b) \left. \begin{aligned} \nabla f(3, 1) &= \langle 6, -27 \rangle \\ \vec{u} = \frac{\vec{v}}{\|\vec{v}\|} &= \left\langle \frac{3}{5}, -\frac{4}{5} \right\rangle \end{aligned} \right\} \Rightarrow D_{\vec{u}} f(3, 1) = 6 \cdot \frac{3}{5} + (-27) \cdot \frac{-4}{5} = \frac{126}{5}$$

* Max/Min of $D_{\vec{u}} f$

Given a function f (of 2 or 3 variables) and a point P , one may ask in what direction does f increase/decrease most rapidly? Equivalently, we need to maximize or minimize $D_{\vec{u}} f(P)$.

But: $D_{\vec{u}} f(P) = \nabla f(P) \cdot \vec{u} = \|\nabla f(P)\| \cdot \underbrace{\|\vec{u}\|}_{1} \cdot \cos \theta$



As $-1 \leq \cos \theta \leq 1$ with $\cos \theta = 1 \Leftrightarrow \theta = 0$
 $\cos \theta = -1 \Leftrightarrow \theta = \pi$

Upshot: * The maximal value of $D_{\vec{u}} f(P)$ equals $\|\nabla f(P)\|$ and is achieved when $\theta = 0$, i.e. \vec{u} is in the direction of $\nabla f(P)$: $\vec{u} = \frac{\nabla f(P)}{\|\nabla f(P)\|}$

* The minimal value of $D_{\vec{u}} f(P)$ equals $-\|\nabla f(P)\|$ and is achieved when $\theta = \pi$, i.e. \vec{u} is in the opposite direction of $\nabla f(P)$:

$$\vec{u} = -\frac{\nabla f(P)}{\|\nabla f(P)\|}$$

LECTURE #7

Ex 4: Let $f(x, y, z) = \frac{x+y}{z}$ and $P(1, 1, 1)$. In what direction does f have the max/min directional derivative? What are the corresponding values?

$$\nabla f = \left\langle \frac{1}{z}, \frac{1}{z}, -\frac{x+y}{z^2} \right\rangle \Rightarrow \nabla f(P) = \langle 1, 1, -2 \rangle$$

So: Maximal value of $D_{\vec{u}} f(P)$ is $\sqrt{1^2 + 1^2 + (-2)^2} = \sqrt{6}$ and is achieved

$$\text{for } \vec{u} = \left\langle \frac{1}{\sqrt{6}}, \frac{1}{\sqrt{6}}, \frac{-2}{\sqrt{6}} \right\rangle$$

Minimal value of $D_{\vec{u}} f(P)$ is $-\sqrt{6}$ and is achieved for $\vec{u} = \left\langle \frac{-1}{\sqrt{6}}, \frac{-1}{\sqrt{6}}, \frac{2}{\sqrt{6}} \right\rangle$

* Tangent Planes to level surfaces & Tangent Lines to level curves

Def: Let S be a level surface of $F(x, y, z)$, i.e. a set of all points (x, y, z) such that $F(x, y, z) = k$ \leftarrow fixed constant, and let $P(x_0, y_0, z_0)$ be on S .

The tangent plane to S at point P is the plane passing through P and perpendicular to $\nabla F(P)$. Thus, it is explicitly given by

$$F_x(x_0, y_0, z_0) \cdot (x - x_0) + F_y(x_0, y_0, z_0) \cdot (y - y_0) + F_z(x_0, y_0, z_0) \cdot (z - z_0) = 0$$

The normal line to S at P is the line passing through P in the direction of $\nabla F(P)$. Thus, it is explicitly given by


$$x = x_0 + F_x(x_0, y_0, z_0) \cdot t, \quad y = y_0 + F_y(x_0, y_0, z_0) \cdot t, \quad z = z_0 + F_z(x_0, y_0, z_0) \cdot t$$

! If F is a function of 2 variables $F(x, y)$, we get the equation of the tangent line to the level curve S at the given point P on S :

$$F_x(x_0, y_0) \cdot (x - x_0) + F_y(x_0, y_0) \cdot (y - y_0) = 0$$

Key Property: If we consider any curve C on S passing through P , then the tangent vector \vec{u} to this curve at P lies in the tangent plane (i.e. is orthogonal to $\nabla F(P)$).

Indeed, as S is a level surface, the function F takes the constant value when restricted to C , which immediately implies



$$\nabla F(P) \cdot \vec{u} = 0 \Rightarrow \vec{u} \text{ is orthogonal to } \nabla F(P)$$

LECTURE #7

Ex 5: (a) Find equation of the tangent plane and the normal line to the surface given by $z^2 - 2xy + e^x = 5$ at point $P(0, 1, 2)$.

(b) For the surface S from (a), find all the points on S at which the tangent plane is parallel to xy -plane.

(a) This surface is a level surface of $F(x, y, z) = z^2 - 2xy + e^x$.

$$\nabla F(x_0, y_0, z_0) = \langle -2y_0 + e^{x_0}, -2x_0, 2z_0 \rangle$$

↓

$$\nabla F(0, 1, 2) = \langle -1, 0, 4 \rangle$$

So: tangent plane is given by $-x + 4(z - 2) = 0$

normal line is given by $\begin{cases} x = -t \\ y = 1 \\ z = 2 + 4t \end{cases}$

(b) Tangent plane is parallel to xy -plane iff the normal vector has form $(0, 0, *)$. But normal vector is given by ∇F .

Thus: we need $-2y + e^x = 0$ and $\underbrace{-2x = 0}_{\downarrow x=0}$
 $\underbrace{}_{\downarrow x=0, y=\frac{1}{2}}$

What about z ? So far it didn't really matter. BUT don't forget that we are looking for points on the surface, i.e.

$$z^2 - 2xy + e^x = 5 \xrightarrow{x=0, y=\frac{1}{2}} z^2 = 4 \Leftrightarrow z = \pm 2.$$

So: At points $(0, \frac{1}{2}, \pm 2)$